




# 2nd Grade Summer Packet



This packet belongs to:

\_\_\_\_\_

# Week 1: Day 1



## Syllables

Put the 6 words in the correct box.

backpack      family      castle  
surfer      elephant      ladybug

2 syllables

3 syllables

## ABC Order

Put the 10 words in ABC Order.

bag	rat
cat	lag
bit	tug
mop	top
fat	plg

1. \_\_\_\_\_
2. \_\_\_\_\_
3. \_\_\_\_\_
4. \_\_\_\_\_
5. \_\_\_\_\_
6. \_\_\_\_\_
7. \_\_\_\_\_
8. \_\_\_\_\_
9. \_\_\_\_\_
10. \_\_\_\_\_

## Adverbs

Circle the adverb in each of the sentences

The girl runs quickly.

My dog barks budly.

My friend whispers softly.

## Nouns

Circle the people, places, & things.

house      zoo

an      him

boy      who

box      shovel

vest      the

## Prefixes

Circle the prefix in each word

misstep

recall

unhappy

retell

preview

## Sentence Construction

Correct the sentences below. Rewrite them correctly.


1. jacks hat wuz blue and green

1. \_\_\_\_\_

2. he haz a bucket

2. \_\_\_\_\_

# Week 1: Day 1



## Addition

Find the sums for each problem below.

$$\begin{array}{r} 34 \\ +24 \\ \hline \square \end{array}$$

$$\begin{array}{r} 63 \\ +24 \\ \hline \square \end{array}$$

$$\begin{array}{r} 85 \\ +48 \\ \hline \square \end{array}$$

## Subtraction

Find the difference for each problem below.

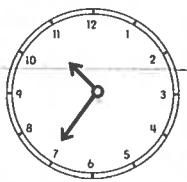
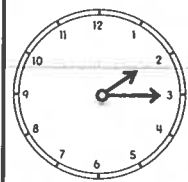
$$\begin{array}{r} 51 \\ -23 \\ \hline \square \end{array}$$

$$\begin{array}{r} 79 \\ -48 \\ \hline \square \end{array}$$

$$\begin{array}{r} 66 \\ -35 \\ \hline \square \end{array}$$

## Time

Write the times shown on the clocks



⋮

⋮

## Shapes

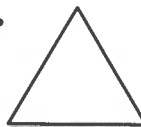
Answer the questions about the shapes below.

1.



— vertices  
— faces  
— edges

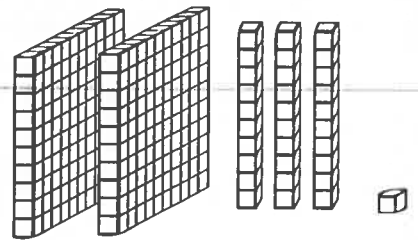
2.



— sides  
— vertices

## Place Value

Write the answer in expanded form.



\_\_\_\_\_ + \_\_\_\_\_ = \_\_\_\_\_

## Word Problem

Answer the problem below. Show your work.

The girl had 12 apples, 6 oranges, and 8 bananas. How much fruit did she have in all?

add

subtract

$$\square \square \square \square = \square$$

## Fact Families

Using the numbers below, create a fact family.

10

15

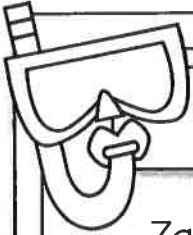


25

$$\square + \square = \square$$

$$\square + \square = \square$$

$$\square - \square = \square$$

$$\square - \square = \square$$



## Reading Comprehension

Zack and Max went to the beach with their parents. When they got there Zack wanted to play in the sand. Max wanted to go in the water. They decided to flip a coin. Zack called heads and Max called tails. The coin landed on heads so the boys built a sand castle first. After they finished building the sand castle, the boys ran into the water. They saw lots of little fish. When they got out of the water, they picked up shells. Zack and Max had a great day at the beach!



Read the story above. Use the story to answer the questions.

1. Where are Zack and Max?

---

---

3. How did the boys solve their problem?

---

---

2. What was the problem?

---

---

4. How would you solve the problem?

---

---

## Sentence Construction

Correct the sentences below. Rewrite them correctly.

1. pam and sam fund shels



1. \_\_\_\_\_

2. did she wear the saras hat

2. \_\_\_\_\_



# Week 1: Day 2



## Addition

Find the sums for each problem below.

$$\begin{array}{r} 43 \\ +55 \\ \hline \square \end{array}$$

$$\begin{array}{r} 84 \\ +19 \\ \hline \square \end{array}$$

$$\begin{array}{r} 30 \\ +36 \\ \hline \square \end{array}$$



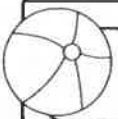
## Subtraction

Find the difference for each problem below.

$$\begin{array}{r} 73 \\ -37 \\ \hline \square \end{array}$$

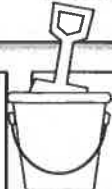
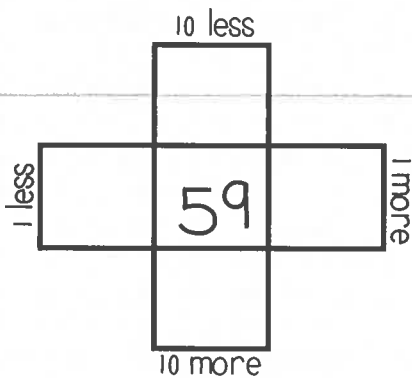
$$\begin{array}{r} 95 \\ -53 \\ \hline \square \end{array}$$

$$\begin{array}{r} 38 \\ -18 \\ \hline \square \end{array}$$




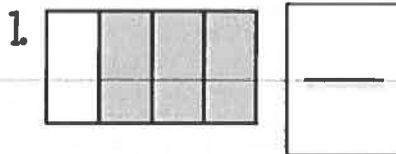
## Multiples of 10

Write in the missing numbers.



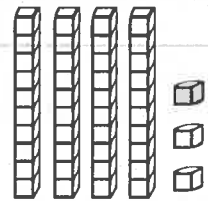
## Fractions

Answer the questions about the fractions below.



## Place Value

Write how many tens and ones you have for each problem and write the problem in expanded form.



\_\_\_ tens \_\_\_ ones =  
+ \_\_\_ =

## Word Problem

Answer the problem below. Show your work.

Sam has 36 pencils. He gives some away. He has 20 left. How many pencils did he give away?

add

subtract

\_\_\_ □ \_\_\_ = \_\_\_

## Fact Families

Using the numbers below, create a fact family.





18 + \_\_\_ = 30

12 + 18 = \_\_\_

30 - \_\_\_ = 18

\_\_\_ - 18 = 12

# Week 1: Day 3



## Dictionary Skills

Read the definitions. Decide which definition was used in the sentence.

### duck

1. a bird that quacks (noun)
2. to get out of the way of something (verb)

The duck swam in the lake.

- Definition 1
- Definition 2

## ABC Order

Put the 10 words in ABC Order.

rate	bale
tale	male
lake	fate
date	pale
file	tile

1. \_\_\_\_\_
2. \_\_\_\_\_
3. \_\_\_\_\_
4. \_\_\_\_\_
5. \_\_\_\_\_
6. \_\_\_\_\_
7. \_\_\_\_\_
8. \_\_\_\_\_
9. \_\_\_\_\_
10. \_\_\_\_\_

## Adverbs

Circle the adverb in each of the sentences.

We walked home slowly.

The snow fell lightly.

Ben cut paper carefully.

## Verbs

Circle the verbs (action words) below.

run friend

walk talked

and cut

one it

called write

## Compound Words

Circle the compound words below.

football following

crazy fireworks

walked butterfly

himself couches

carrying sunshine

## Sentence Construction

Correct the sentences below. Rewrite them correctly.



1. did jessica may and tim go to the store

1. \_\_\_\_\_

2. my birthday wuz march 8 2013

2. \_\_\_\_\_

# Week 1: Day 3



## Addition

Find the sums for each problem below.

$$\begin{array}{r} 321 \\ +446 \\ \hline \end{array}$$

$$\begin{array}{r} 73 \\ +54 \\ \hline \end{array}$$

$$\begin{array}{r} 40 \\ +29 \\ \hline \end{array}$$




## Subtraction

Find the difference for each problem below.

$$\begin{array}{r} 512 \\ -253 \\ \hline \end{array}$$

$$\begin{array}{r} 48 \\ -26 \\ \hline \end{array}$$

$$\begin{array}{r} 35 \\ -18 \\ \hline \end{array}$$




## Time

Write the times shown on the clocks



:

:

## Counting

Fill in the missing numbers.

102, 103, \_\_\_\_, \_\_\_\_, 106

140, \_\_\_\_, \_\_\_\_, 170, \_\_\_\_

81, 82, 83, \_\_\_\_, \_\_\_\_, \_\_\_\_

\_\_\_\_, \_\_\_\_, 45, 50, \_\_\_\_

## Money

Count the coins. Write your answer in the box.






## Word Problem

Answer the problem below. Show your work.

Bella caught the ball 15 times yesterday and 23 times today.  
How many times did Bella catch the ball in all?

add

subtract

\_\_\_\_ □ \_\_\_\_ = \_\_\_\_



## Graphing

Use the graph below to answer the questions.

	2	4	6	8
Cats				
Dogs				

- How many kids chose dogs? \_\_\_\_
- How many kids chose cats? \_\_\_\_
- How many kids voted in all? \_\_\_\_

# Week 2: Day 1



## Syllables

Put the 6 words in the correct box.

potato      starfish      basketball

hamburger      Frisbee      sunshine

2 syllables

3 syllables

## ABC Order

Put the 10 words in ABC Order.

dog	lizard
snake	ferret
hamster	bird
rabbit	horse
turtle	cat

- \_\_\_\_\_
- \_\_\_\_\_
- \_\_\_\_\_
- \_\_\_\_\_
- \_\_\_\_\_
- \_\_\_\_\_
- \_\_\_\_\_
- \_\_\_\_\_
- \_\_\_\_\_
- \_\_\_\_\_

## Adverbs

Circle the adverb in each of the sentences.

The child waited patiently.

The band played loudly.

He ate it quickly.

## Adjectives

Find the describing words.

one      talk

pretty      hot

barn      friend

bright      cup

chair      blue

## Suffixes

Circle the suffix in each word.

useless

durable

bigger

badly

helpless

## Sentence Construction

Correct the sentences below. Rewrite them correctly.



1. the flowers werent growing

1. \_\_\_\_\_

2. april come before may

2. \_\_\_\_\_

# Week 2: Day 1



## Addition

Find the sums for each problem below.

$$\begin{array}{r} 563 \\ +271 \\ \hline \end{array}$$

$$\begin{array}{r} 80 \\ +69 \\ \hline \end{array}$$

$$\begin{array}{r} 31 \\ +18 \\ \hline \end{array}$$




## Subtraction

Find the difference for each problem below.

$$\begin{array}{r} 480 \\ -135 \\ \hline \end{array}$$

$$\begin{array}{r} 39 \\ -29 \\ \hline \end{array}$$

$$\begin{array}{r} 79 \\ -38 \\ \hline \end{array}$$




## Time

Write the times shown on the clocks.



:

:

## Shapes

Answer the questions about the shapes below.

1.



\_\_\_ sides  
\_\_\_ corners

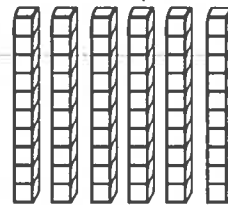
2.



\_\_\_ vertices  
\_\_\_ faces  
\_\_\_ edges

## Place Value

Write how many tens and ones you have for each problem and write the problem in expanded form.



\_\_\_ tens \_\_\_ ones =  
+ \_\_\_ = \_\_\_

## Word Problem

Answer the problem below. Show your work.

April had 12 pens. Max had 14 pens.  
Sam had 16 pens. How many pens  
did they have altogether?

add

subtract

$$\square \square \square = \square$$

## Fact Families

Using the numbers below, create a fact family.

37

24


13

$$\square + \square = \square$$

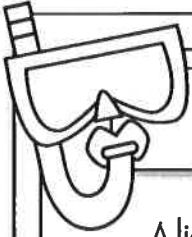

$$\square + \square = \square$$

$$\square - \square = \square$$

$$\square - \square = \square$$



# Week 2: Day 2



## Reading Comprehension

Alicia and Pam like to go to school. They get to learn new things and they get to see their friends. Both of them are in second grade with Mrs. Johnson. Alicia's favorite subject is science. She likes to learn about plants. Pam's favorite subject is math. She likes to see how fast she can add. Both of them love recess. Alicia likes the swings and Pam likes the slide. Alicia and Pam think that school is a lot of fun.



Read the story above. Use the story to answer the questions.

1. Why do you think that Alicia's favorite subject is science?

\_\_\_\_\_

\_\_\_\_\_

3. How are Alicia and Pam alike?

\_\_\_\_\_

\_\_\_\_\_

2. Why does Pam like math?

\_\_\_\_\_

4. How are Alicia and Pam different?

\_\_\_\_\_

\_\_\_\_\_

## Sentence Construction

Correct the sentences below. Rewrite them correctly.


1. how old is megans aunt

1. \_\_\_\_\_


2. didnt lesley help you find the dog

2. \_\_\_\_\_





# Week 2: Day 2



## Addition

Find the sums for each problem below.

$$\begin{array}{r} 526 \\ +285 \\ \hline \end{array}$$

$$\begin{array}{r} 39 \\ +23 \\ \hline \end{array}$$

$$\begin{array}{r} 56 \\ +27 \\ \hline \end{array}$$



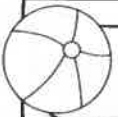
## Subtraction

Find the difference for each problem below.

$$\begin{array}{r} 734 \\ -246 \\ \hline \end{array}$$

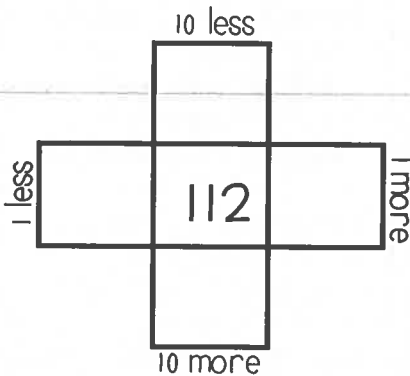
$$\begin{array}{r} 31 \\ -8 \\ \hline \end{array}$$

$$\begin{array}{r} 76 \\ -29 \\ \hline \end{array}$$



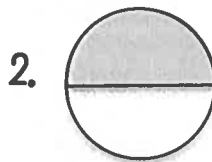
## Multiples of 10

Write in the missing numbers.



## Fractions

Answer the questions about the fractions below.



## Odd/Even

Circle the odd numbers.

44      31

98      80

75      53

32      65

## Word Problem

Answer the problem below. Show your work.

Ann had 18 pieces of candy. She shared them with 3 friends. How many pieces did each friend get?

## Fact Families

Using the numbers below, create a fact family.


<input type="text"/>	<input type="text"/>	<input type="text"/>
----------------------	----------------------	----------------------

$19 + \underline{\quad} = 53$


$34 + 19 = \underline{\quad}$

$53 - \underline{\quad} = 34$

$\underline{\quad} - 34 = 19$



# Week 2: Day 3



## Dictionary Skills

Read the definitions. Decide which definition was used in the sentence.

### ring

1. a round object you wear on your finger(noun)
2. the sound a phone makes(verb)

My ring is on my left hand.

- Definition 1
- Definition 2

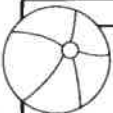


## ABC Order

Put the 10 words in ABC Order.

grapes	orange
apple	pear
mango	fruit
banana	melon
cherry	berry

1. \_\_\_\_\_
2. \_\_\_\_\_
3. \_\_\_\_\_
4. \_\_\_\_\_
5. \_\_\_\_\_
6. \_\_\_\_\_
7. \_\_\_\_\_
8. \_\_\_\_\_
9. \_\_\_\_\_
10. \_\_\_\_\_



## Pronouns

Circle the pronoun that can replace the underlined words.

The kids ran outside.

- |      |     |
|------|-----|
| They | She |
|------|-----|

Tim walked home.

- |    |     |
|----|-----|
| He | Him |
|----|-----|



## Proper Nouns

Circle the words that need capital letters.

- |           |        |
|-----------|--------|
| april     | kid    |
| monday    | zack   |
| too       | lamp   |
| christmas | may    |
| light     | friend |



## Compound Words

Circle the compound words below.

hamburger	funny
talking	popcorn
surfer	airport
sunflower	ladder
calling	firefly

## Sentence Construction

Correct the sentences below. Rewrite them correctly.

1. robin likes dogs cats fishes and rabbits



1. \_\_\_\_\_

2. thanksgiving is in november

2. \_\_\_\_\_



# Week 2: Day 3



## Addition

Find the sums for each problem below.

$$\begin{array}{r} 3321 \\ +5746 \\ \hline \end{array}$$

$$\begin{array}{r} 3971 \\ +2844 \\ \hline \end{array}$$

## Subtraction

Find the difference for each problem below.

$$\begin{array}{r} 7512 \\ - 283 \\ \hline \end{array}$$

$$\begin{array}{r} 9325 \\ - 6185 \\ \hline \end{array}$$

## Time

Write the times shown on the clocks






## Counting

Fill in the missing numbers.

600, 700, \_\_\_\_, \_\_\_\_, 1000

\_\_\_\_, \_\_\_\_, 220, 230, \_\_\_\_

50, \_\_\_\_, 52, \_\_\_\_, \_\_\_\_

\_\_\_\_, 85, \_\_\_\_, \_\_\_\_, 100

## Money

Count the coins. Write your answer in the box.






## Word Problem

Answer the problem below. Show your work.

Max found 18 seashells. He shared them with 6 friends. How many shells did each of his friends get?



## Graphing

Use the graph below to answer the questions.

	2	4	6	8	10
Pizza					
Burger					

- How many kids chose pizza? \_\_\_\_
- How many kids chose burgers? \_\_\_\_
- How many kids voted in all? \_\_\_\_

# Week 3: Day 1



## Syllables

Put the 6 words in the correct box.

horses      garden      candy  
grasshopper      dinosaur      notebook

2 syllables

3 syllables

## ABC Order

Put the 10 words in ABC Order.

shovel	ocean
bucket	flip flops
shell	towel
popsicle	sun
waves	beach

- \_\_\_\_\_
- \_\_\_\_\_
- \_\_\_\_\_
- \_\_\_\_\_
- \_\_\_\_\_
- \_\_\_\_\_
- \_\_\_\_\_
- \_\_\_\_\_
- \_\_\_\_\_
- \_\_\_\_\_

## Pronouns

Circle the pronoun that can replace the underlined words.

His mom made us pizza.

Her

She

I called Max on the phone.

he

him

## Adjectives

Find the describing words.

cloudy      big  
eyes      nice  
floor      and  
call      short  
soft      carpet

## Root Words

Circle the root words below.

tell	tells
bigger	big
smiling	smile
eat	eating
sleep	sleeps

## Sentence Construction

Correct the sentences below. Rewrite them correctly.



1. stephanie couldnt go to walmart

1. \_\_\_\_\_

2. meg wrote a letter on april 1, 2011

2. \_\_\_\_\_

# Week 3: Day 1



## Addition

Find the sums for each problem below.

$$\begin{array}{r} 541 \\ +249 \\ \hline \end{array}$$

$$\begin{array}{r} 83 \\ +34 \\ \hline \end{array}$$

$$\begin{array}{r} 60 \\ +37 \\ \hline \end{array}$$

## Subtraction

Find the difference for each problem below.

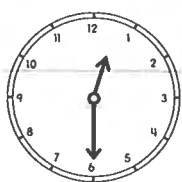
$$\begin{array}{r} 768 \\ -256 \\ \hline \end{array}$$

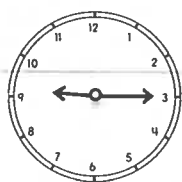
$$\begin{array}{r} 66 \\ -36 \\ \hline \end{array}$$

$$\begin{array}{r} 42 \\ -28 \\ \hline \end{array}$$

## Time

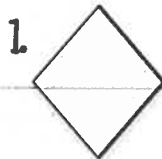
Write the times shown on the clocks.



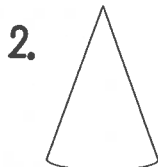



## Shapes

Answer the questions about the shapes below.



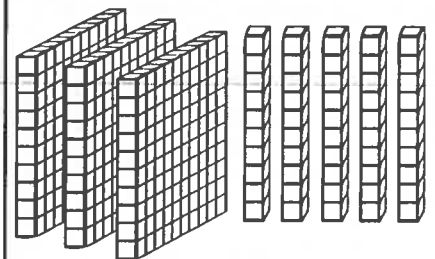
\_\_\_ sides  
\_\_\_ vertices



\_\_\_ vertices  
\_\_\_ faces  
\_\_\_ edges

## Place Value

Write the answer in expanded form.



\_\_\_ + \_\_\_ = \_\_\_

## Word Problem

Answer the problem below. Show your work.

Cam had 10 baseballs. Max had 26 baseballs. Sam had 13 baseballs. How many baseballs did they have altogether?

add

subtract

   = 

## Fact Families

Using the numbers below, create a fact family.

26

42


68

\_\_\_ + \_\_\_ = \_\_\_



\_\_\_ + \_\_\_ = \_\_\_

\_\_\_ - \_\_\_ = \_\_\_

\_\_\_ - \_\_\_ = \_\_\_




# Week 3: Day 2



## Reading Comprehension

Ben is my dog. He likes to bark at big trucks. He likes to catch his baseball. When he gets hungry, Ben pushes his dish to my feet. One day, I went outside to get the mail. When I came back inside I could not find Ben. I looked under my bed, in the bathroom, and in the kitchen. He was not in any of those places. All of a sudden, I heard a scratching noise and a bark. I ran to the door and opened it. Ben had followed me outside. I gave him a treat for waiting for me. Ben is a great dog!



Read the story above. Use the story to answer the questions.

- |  |   |
|--|---|
| <p>1. What was the problem?</p> <p>_____</p> <p>_____</p>                                | <p>3. Name two places the boy looked for Ben.</p> <p>_____</p> <p>_____</p> |
| <p>2. How would you search for your dog if it was missing?</p> <p>_____</p> <p>_____</p> | <p>4. Where was Ben?</p> <p>_____</p>                                       |

## Sentence Construction



Correct the sentences below. Rewrite them correctly.

1. alicia cant eat onions beans or eggs



1. \_\_\_\_\_

2. did you see the boys horse run

2. \_\_\_\_\_



# Week 3: Day 2



## Addition

Find the sums for each problem below.

$$\begin{array}{r} 813 \\ +176 \\ \hline \end{array}$$

$$\begin{array}{r} 22 \\ +30 \\ \hline \end{array}$$

$$\begin{array}{r} 76 \\ +39 \\ \hline \end{array}$$




## Subtraction

Find the difference for each problem below.

$$\begin{array}{r} 833 \\ -457 \\ \hline \end{array}$$

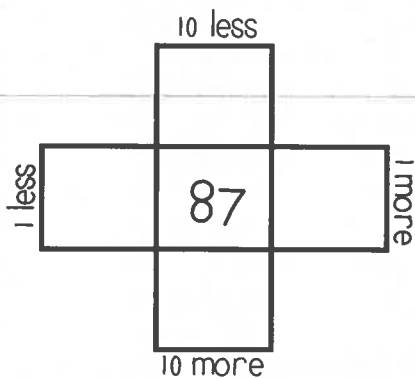
$$\begin{array}{r} 83 \\ -29 \\ \hline \end{array}$$

$$\begin{array}{r} 21 \\ -9 \\ \hline \end{array}$$






## Multiples of 10

Write in the missing numbers.



## Fractions

Answer the questions about the fractions below.



## Odd/Even

Circle the even numbers.

62      40

85      57

48      37

63      92

## Word Problem

Answer the problem below. Show your work.

Kristen picked up 35 shells. Her sister picked up 16 shells. How many more shells did Kristen pick up than her sister?

add

subtract

=

## Fact Families

Using the numbers below, create a fact family.



$16 + \underline{\quad} = 35$

$16 + 19 = \underline{\quad}$

$35 - \underline{\quad} = 16$

$\underline{\quad} - 16 = 19$

# Week 3: Day 3



## Dictionary Skills

Read the definitions. Decide which definition was used in the sentence.

### bat

1. an object used to hit a ball(noun)
2. an animal that flies at night(noun)

The bat lives in a cave.

- Definition 1
- Definition 2

## ABC Order

Put the 10 words in ABC Order.

rock	luck
sock	dock
lock	pack
tack	mock
crock	duck

1. \_\_\_\_\_
2. \_\_\_\_\_
3. \_\_\_\_\_
4. \_\_\_\_\_
5. \_\_\_\_\_
6. \_\_\_\_\_
7. \_\_\_\_\_
8. \_\_\_\_\_
9. \_\_\_\_\_
10. \_\_\_\_\_

## Pronouns

Circle the pronoun that can replace the underlined words.

Zack and I went to dinner.

They

We

The tree was tall.

It

He

## Proper Nouns

Circle the words that need capital letters.

jackson

ball

leaves

june

monday

lisa

ribbon

pens

october

glue

## Prefixes

Circle the prefix in each word.

preface

unhelpful

mistake

review

mistreat

## Sentence Construction

Correct the sentences below. Rewrite them correctly.



1. january an february arent hot months

1. \_\_\_\_\_

2. we went surfing in california

2. \_\_\_\_\_

# Week 3: Day 3



## Addition

Find the sums for each problem below.

$$\begin{array}{r} 423 \\ +289 \\ \hline \end{array}$$

$$\begin{array}{r} 52 \\ +54 \\ \hline \end{array}$$

$$\begin{array}{r} 31 \\ +47 \\ \hline \end{array}$$

## Subtraction

Find the difference for each problem below.

$$\begin{array}{r} 991 \\ -462 \\ \hline \end{array}$$

$$\begin{array}{r} 288 \\ -187 \\ \hline \end{array}$$

$$\begin{array}{r} 69 \\ -57 \\ \hline \end{array}$$

## Time

Write the times shown on the clocks.






## Counting

Fill in the missing numbers.

110, 210, \_\_\_\_, \_\_\_\_, 510

\_\_\_\_, \_\_\_\_, 100, 105, \_\_\_\_

200, \_\_\_\_, 400, \_\_\_\_, \_\_\_\_

\_\_\_\_, 110, \_\_\_\_, \_\_\_\_, 113

## Money

Count the coins. Write your answer in the box.






## Word Problem

Answer the problem below. Show your work.

Max caught 13 fish on Monday, 12 fish on Tuesday, and 14 fish on Wednesday. How many fish did he catch in all?

add

subtract

$$\square \square \square \square \square = \square$$



## Graphing

Use the graph below to answer the questions.

	5	10	15	20	25
Beach					
Camping					

- How many went to the beach? \_\_\_\_
- How many went camping? \_\_\_\_
- How many more went to the beach than camping? \_\_\_\_

# Week 4: Day 1



## Syllables

Put the words in the correct box.

flower      jumping      grandfather

computer      ribbon      paperclip

2 syllables

3 syllables

## ABC Order

Put the 10 words in ABC Order.

ketchup	mustard
cheese	hotdog
tomato	pickles
hamburger	fries
chips	lettuce

1. \_\_\_\_\_
2. \_\_\_\_\_
3. \_\_\_\_\_
4. \_\_\_\_\_
5. \_\_\_\_\_
6. \_\_\_\_\_
7. \_\_\_\_\_
8. \_\_\_\_\_
9. \_\_\_\_\_
10. \_\_\_\_\_

## Pronouns

Circle the pronoun that can replace the underlined words.

Did you catch the ball?

him

it

Kate and Matt run fast.

They

Them

## Verbs

Circle the verbs (action words) below.

talked

shirt

ate

rolled

pancake

shoes

blue

eight

fan

painting

## Root Words

Circle the root words below.

walking

walk

hug

hugging

swim

swimming

touched

touch

type

typing

## Sentence Construction

Correct the sentences below. Rewrite them correctly.



1. meg matt and julie at chips and hotdogs

1. \_\_\_\_\_

2. the boys went to burger king

2. \_\_\_\_\_

# Week 4: Day 1



## Addition

Find the sums for each problem below.

$$\begin{array}{r} 251 \\ +329 \\ \hline \end{array}$$

$$\begin{array}{r} 24 \\ +34 \\ \hline \end{array}$$

$$\begin{array}{r} 21 \\ +37 \\ \hline \end{array}$$

## Subtraction

Find the difference for each problem below.

$$\begin{array}{r} 332 \\ -233 \\ \hline \end{array}$$

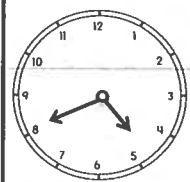
$$\begin{array}{r} 69 \\ -39 \\ \hline \end{array}$$

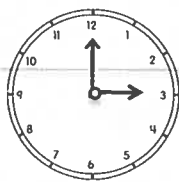
$$\begin{array}{r} 54 \\ -28 \\ \hline \end{array}$$



## Time

Write the times shown on the clocks

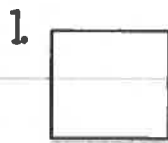






## Shapes

Read the questions. Circle the answers for each question.



What shape is this?

square  
rectangle



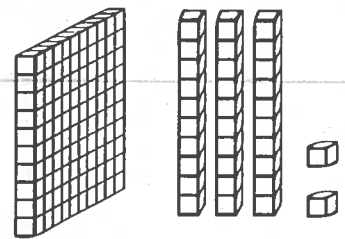
What shape is this?

hexagon  
trapezoid



## Place Value

Write the answer in expanded form.



\_\_\_\_\_ + \_\_\_\_\_ = \_\_\_\_\_

## Word Problem

Answer the problem below. Show your work.

Zack had 12 hats. His brother gave him 12 more hats. How many hats does Zack have in all?

add

subtract

\_\_\_\_\_  \_\_\_\_\_ = \_\_\_\_\_

## Fact Families

Using the numbers below, create a fact family.

30

64


34

\_\_\_\_\_ + \_\_\_\_\_ = \_\_\_\_\_


\_\_\_\_\_ + \_\_\_\_\_ = \_\_\_\_\_

\_\_\_\_\_ - \_\_\_\_\_ = \_\_\_\_\_

\_\_\_\_\_ - \_\_\_\_\_ = \_\_\_\_\_




# Week 4: Day 2



## Reading Comprehension

Sam's favorite meal is breakfast. His favorite breakfast is eggs, pancakes, and bacon. Sometimes he eats cereal. Once a week, he eats grits and ham. He always drinks orange juice with his breakfast. The only thing he does not like is oatmeal. Sam thinks it is yuck. One time, his sister tried to trick him. She put a piece of cheese on top of oatmeal and told Sam that it was cheese grits. He took one bite and spit them out on the table. That was the only day that breakfast was not his favorite meal.



Read the story above. Use the story to answer the questions.

1. What is Sam's favorite meal? Why do you think that is his favorite meal?

---



---



---



---

2. What did Sam's sister do to trick him? How do you think Sam felt?

---



---

3. What would you do if you ate something you didn't like?

---

## Sentence Construction

Correct the sentences below. Rewrite them correctly.

1. its cold in the hug house

1. 

---



2. marks game is on october 4 2013

2. 

---



# Week 4: Day 2



## Addition

Find the sums for each problem below.

$$\begin{array}{r} 2467 \\ +3241 \\ \hline \end{array}$$

$$\begin{array}{r} 4768 \\ +3803 \\ \hline \end{array}$$

## Subtraction

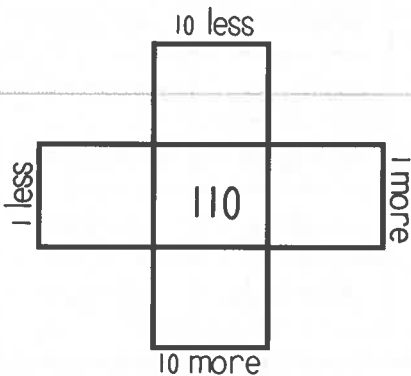
Find the difference for each problem below.

$$\begin{array}{r} 8500 \\ -4378 \\ \hline \end{array}$$

$$\begin{array}{r} 6450 \\ -2137 \\ \hline \end{array}$$


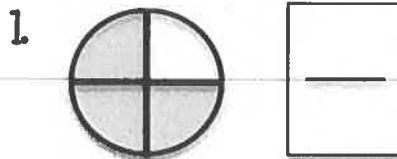
## Multiples of 10

Write in the missing numbers.



## Fractions

Answer the questions about the fractions below.



## Odd/Even

Circle the odd numbers.

- |    |    |
|----|----|
| 73 | 27 |
| 80 | 42 |
| 49 | 38 |
| 26 | 91 |

## Word Problem

Answer the problem below. Show your work.

Jessica has 28 rings. She gave 13 to Meg. How many does she have now?

add

subtract

=


## Fact Families

Using the numbers below, create a fact family.

<input style="width: 50px; height: 30px;" type="text"/>	<input style="width: 50px; height: 30px;" type="text"/>	<input style="width: 50px; height: 30px;" type="text"/>
---	---	---

$35 + \underline{\quad} = 70$

$70 - \underline{\quad} = 35$



# Week 4: Day 3



## Dictionary Skills

Read the definitions. Decide which definition was used in the sentence.

- bat**
- an object used to hit a ball(noun)
  - an animal that flies at night(noun)

He used the bat to hit the ball.

- Definition 1
- Definition 2

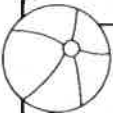


## ABC Order

Put the 10 words in ABC Order.

farm	pig
horse	cow
chickens	duck
tractor	hen
field	barn

- \_\_\_\_\_
- \_\_\_\_\_
- \_\_\_\_\_
- \_\_\_\_\_
- \_\_\_\_\_
- \_\_\_\_\_
- \_\_\_\_\_
- \_\_\_\_\_
- \_\_\_\_\_
- \_\_\_\_\_



## Pronouns

Circle the pronoun that can replace the underlined words.

The cows ate grass.

They	It
------	----

Did you see Meg?

she	her
-----	-----



## Adjectives

Circle the words that are adjectives.

- |         |        |
|---------|--------|
| four    | cool   |
| running | band   |
| pink    | table  |
| hard    | light  |
| bed     | hammer |



## Compound Words

Circle the compound words below.

blackberry	computer
opened	peppermint
balloons	grasshopper
railroad	dresses
bedroom	airport

## Sentence Construction

Correct the sentences below. Rewrite them correctly.

1. cant you call meg for me



1. \_\_\_\_\_

2. didnt you see the deer bears and snakes

2. \_\_\_\_\_



# Week 4: Day 3



## Addition

Find the sums for each problem below.

$$\begin{array}{r} 726 \\ +286 \\ \hline \end{array}$$

$$\begin{array}{r} 83 \\ +24 \\ \hline \end{array}$$

$$\begin{array}{r} 27 \\ +37 \\ \hline \end{array}$$

## Subtraction

Find the difference for each problem below.

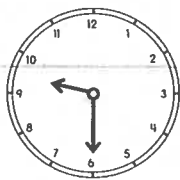
$$\begin{array}{r} 630 \\ -353 \\ \hline \end{array}$$

$$\begin{array}{r} 72 \\ -46 \\ \hline \end{array}$$

$$\begin{array}{r} 70 \\ -28 \\ \hline \end{array}$$

## Time

Write the times shown on the clocks






## Counting

Fill in the missing numbers.

25, 30, \_\_\_\_, \_\_\_\_, 45

\_\_\_\_, \_\_\_\_, 800, 900, \_\_\_\_

40, \_\_\_\_, 60, \_\_\_\_, \_\_\_\_

\_\_\_\_, 102, \_\_\_\_, \_\_\_\_, 105

## Money

Count the coins. Write your answer in the box






## Word Problem

Answer the problem below. Show your work.

Cam cooked 6 eggs and shared them with 2 friends. How many eggs did each friend get?



## Graphing

Use the graph below to answer the questions.

	3	6	9	12	15
Cats					
Dogs					

- How many chose cats? \_\_\_\_
- How many more chose dogs than cats? \_\_\_\_
- How many voted in all? \_\_\_\_

# Week 5: Day 1



## Syllables

Put the 6 words in the correct box.

Kristen      Angela      Bobby  
Jeremy      Jennifer      Steven

2 syllables

3 syllables

## ABC Order

Put the 10 words in ABC Order.

triangle	cube
square	rectangle
circle	cylinder
pyramid	trapezoid
octagon	shape

1. \_\_\_\_\_
2. \_\_\_\_\_
3. \_\_\_\_\_
4. \_\_\_\_\_
5. \_\_\_\_\_
6. \_\_\_\_\_
7. \_\_\_\_\_
8. \_\_\_\_\_
9. \_\_\_\_\_
10. \_\_\_\_\_

## Articles

Circle the article that can be used to complete the sentence.

\_\_\_\_\_ cow drank water.

The

An

I want to eat \_\_\_\_\_  
apple.

a

an

## Nouns

Find the people, places, and things.

cows

blue

friends

yawned

pencil

markers

skipped

found

plates

bread

## Suffixes

Circle the suffix in each word.

excitable

inventor

careless

happily

translator

## Sentence Construction

Correct the sentences below. Rewrite them correctly.



1. tomorrow is august 9 2013

1. \_\_\_\_\_

2. the mans dog swam in the river

2. \_\_\_\_\_

# Week 5: Day 1



## Addition

Find the sums for each problem below.

$$\begin{array}{r} 520 \\ +399 \\ \hline \end{array}$$

$$\begin{array}{r} 41 \\ +48 \\ \hline \end{array}$$

$$\begin{array}{r} 70 \\ +19 \\ \hline \end{array}$$





## Subtraction

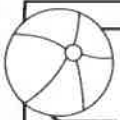
Find the difference for each problem below.

$$\begin{array}{r} 777 \\ -289 \\ \hline \end{array}$$

$$\begin{array}{r} 38 \\ -16 \\ \hline \end{array}$$


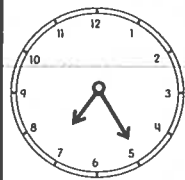
$$\begin{array}{r} 62 \\ -37 \\ \hline \end{array}$$





## Time

Write the times shown on the clocks.






## Shapes

Read the questions. Circle the answers for each question.

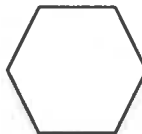
1.



What shape is this?

\_\_\_\_\_

2.



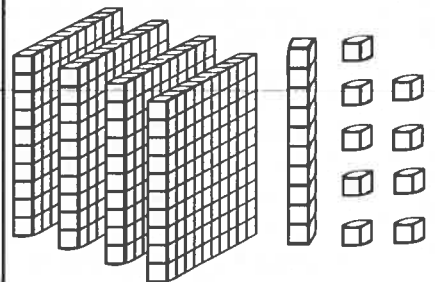
What shape is this?

\_\_\_\_\_



## Place Value

Write the answer in expanded form.



\_\_\_\_\_ + \_\_\_\_\_ = \_\_\_\_\_

## Word Problem

Answer the problem below. Show your work.

Jessica picked 32 flowers. She gave some away. She has 18 left. How many did she give away?

add

subtract

## Fact Families

Using the numbers below, create a fact family.

24

11


13

$$\underline{\quad} + \underline{\quad} = \underline{\quad}$$

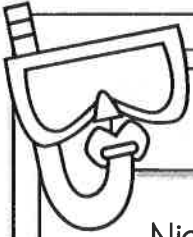

$$\underline{\quad} + \underline{\quad} = \underline{\quad}$$

$$\underline{\quad} - \underline{\quad} = \underline{\quad}$$

$$\underline{\quad} - \underline{\quad} = \underline{\quad}$$



# Week 5: Day 2



## Reading Comprehension

Nick, Max, and Tim wanted to make pizza for dinner. First, they went to the store and bought the items they needed. Next, Nick and Max rolled out the dough on a pan. Then, Tim put on sauce, cheese, and pepperoni. After that, they put the pizza in the oven and waited for the pizza to cook. Finally, they pulled the pizza out of the oven, put it on their plates, and ate it.



Read the story above. Use the story to answer the questions.

- Write down the steps the kids took to make the pizza.

---



---



---



---



---

- What do you think the kids did after they finished eating?

---

## Sentence Construction

Correct the sentences below. Rewrite them correctly.

- sue cat and bo ate at pizza hut

1.


---

- cant you call fred and fran


2.

---





# Week 5: Day 2



## Addition

Find the sums for each problem below.

$$\begin{array}{r} 278 \\ +333 \\ \hline \end{array}$$

$$\begin{array}{r} 89 \\ +50 \\ \hline \end{array}$$

$$\begin{array}{r} 60 \\ +49 \\ \hline \end{array}$$



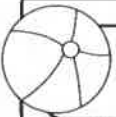
## Subtraction

Find the difference for each problem below.

$$\begin{array}{r} 800 \\ -263 \\ \hline \end{array}$$

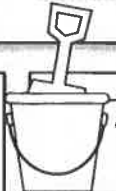
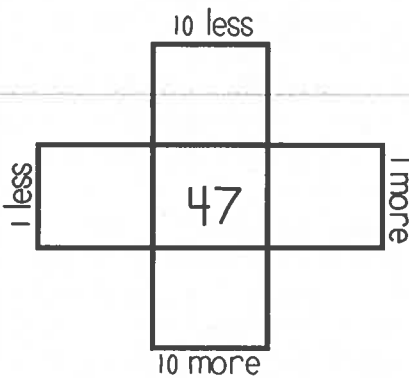
$$\begin{array}{r} 59 \\ -37 \\ \hline \end{array}$$

$$\begin{array}{r} 42 \\ -7 \\ \hline \end{array}$$



## Multiples of 10

Write in the missing numbers.



## True/False

Circle the problems below that are true.

1.  $5+9 = 18$

2.  $9+7 = 16$

3.  $9+9 = 18$

4.  $6+5 = 10$



## Odd/Even

Circle the even numbers.

18

10

96

7

61

126

29

43

## Word Problem

Answer the problem below. Show your work.

Nan has 26 flowers. She gave 12 to her sister. How many flowers does she have left?

add

subtract

=

## Fact Families

Using the numbers below, create a fact family.



$14 + \underline{\quad} = 73$

$14 + 59 = \underline{\quad}$

$73 - \underline{\quad} = 59$

$\underline{\quad} - 59 = 14$

# Week 5: Day 3



## Dictionary Skills

Read the definitions. Decide which definition was used in the sentence.

### trip

1. to go on a vacation(noun)
2. to fall over something(verb)

The family took a trip to the beach.

- Definition 1
- Definition 2

## ABC Order

Put the 10 words in ABC Order.

pencil	book
desk	glue
stapler	crayons
paper	eraser
chalk	tape

1. \_\_\_\_\_
2. \_\_\_\_\_
3. \_\_\_\_\_
4. \_\_\_\_\_
5. \_\_\_\_\_
6. \_\_\_\_\_
7. \_\_\_\_\_
8. \_\_\_\_\_
9. \_\_\_\_\_
10. \_\_\_\_\_

## Articles

Circle the article that can be used to complete the sentence.

She drew \_\_\_\_ ant.

a

an

Will he throw \_\_\_\_ ball?

the

an

## Pronouns

Circle the words that are pronouns

pen

them

clip

he

it

called

they

me

shorts

staple

## Compound Words

Circle the compound words below.

seashore

winner

himself

matched

hurry

earring

earthquake

taken

closed

toothpick

## Sentence Construction

Correct the sentences below. Rewrite them correctly.



1. who cooked zacks dinner

1. \_\_\_\_\_

2. sam fran and meg went to eat

2. \_\_\_\_\_

# Week 5: Day 3



## Addition

Find the sums for each problem below.

$$\begin{array}{r} 294 \\ +337 \\ \hline \end{array}$$

$$\begin{array}{r} 92 \\ +33 \\ \hline \end{array}$$

$$\begin{array}{r} 50 \\ +49 \\ \hline \end{array}$$

## Subtraction

Find the difference for each problem below.

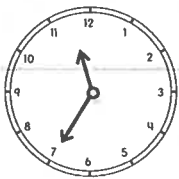
$$\begin{array}{r} 820 \\ -452 \\ \hline \end{array}$$

$$\begin{array}{r} 39 \\ -17 \\ \hline \end{array}$$

$$\begin{array}{r} 56 \\ -35 \\ \hline \end{array}$$

## Time

Write the times shown on the clocks.






## Counting

Fill in the missing numbers.

19, 20, \_\_\_\_, \_\_\_\_, 23, \_\_\_\_

\_\_\_\_, \_\_\_\_, 300, 400, \_\_\_\_

40, \_\_\_\_, 50, \_\_\_\_, \_\_\_\_

\_\_\_\_, 100, \_\_\_\_, \_\_\_\_, 103

## Money

Count the coins. Write your answer in the box.





## Word Problem

Answer the problem below. Show your work.

I have 13 pieces of gum, 14 pieces of chocolate, and 25 gummy bears.

How many pieces of candy do I have in all?

add

subtract

## Graphing

Use the graph below to answer the questions.

	1	2	3	4	5
Sausage					
Cheese					

- How many kids chose sausage? \_\_\_\_
- How many kids chose cheese? \_\_\_\_
- How many voted in all? \_\_\_\_

